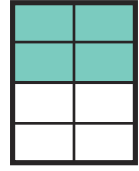
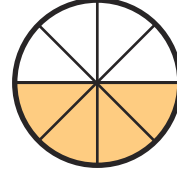
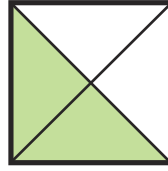
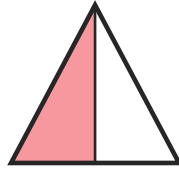


# One Half

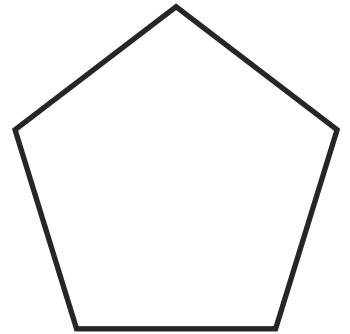

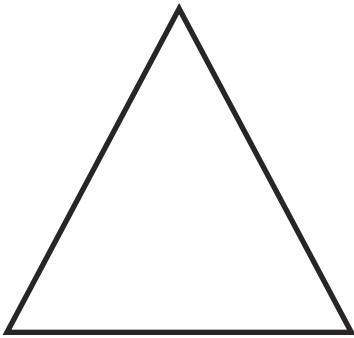
One half can be written as:

$$\frac{1}{2} \text{ or } \frac{2}{4} \text{ or } \frac{3}{6} \text{ or } \frac{4}{8}$$

One half of each of these shapes is shaded:



1. Colour one half of each of these shapes.



2. Colour one half of each of these groups of animals.



**3.** Write down half of each number.

What number is half of 2? \_\_\_\_\_

What number is half of 8? \_\_\_\_\_

What number is half of 4? \_\_\_\_\_

What number is half of 10? \_\_\_\_\_

What number is half of 6? \_\_\_\_\_

What number is half of 20? \_\_\_\_\_